

Use patterns to find missing points

Look at the set of points.

(1,5)

(2,6)

(3,7)

(4,___)

What number would go in the blank?

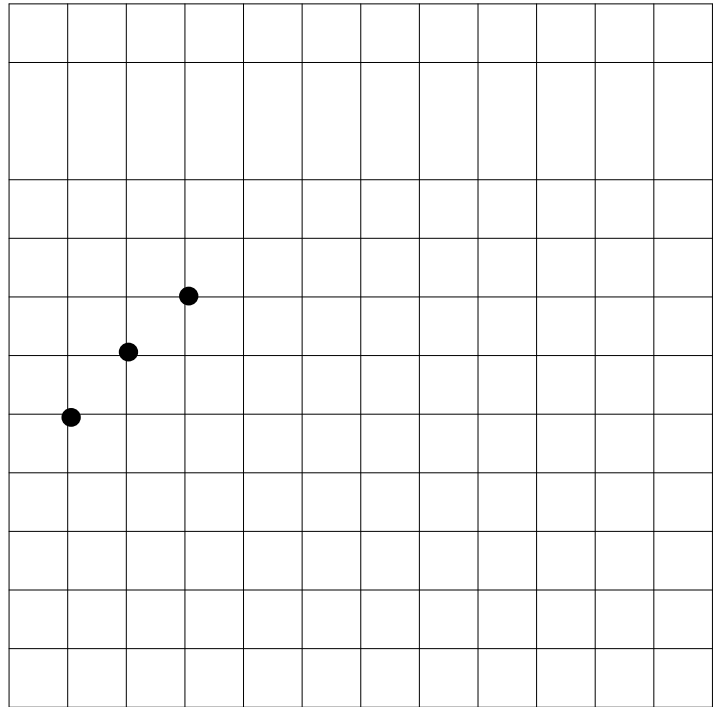
Plot the points.

What are some other points that would

fit the pattern?

Are they on a line?

What is the relationship between each pair of numbers?



Plot the points and look for a pattern.

(1, 2)


(2, 4)

(3, 6)

(4,___)

What are some other numbers?

What relationship exists between each pair of



(2, 5)


(4, 7)

(6, 9)

(5,___)

What are some other numbers?

What relationship exists between each pair of



(1, 3)


(2, 5)

(3, 7)

(4,___)

What are some other numbers?

What relationship exists between each pair of



(10, 7)

(7, 4)

(3, 0)

(4,___)

What are some other numbers?

What relationship exists between each pair of

